

Viewing the assignment report

Assigned Tasks

7rb4 - Negative Numbers - (10/12/15 - 21/07/16)

Exercises

Negative number problems

24 / 25 students have attempted this exercise

- a) Once an assignment completes, you will receive an email (if we have email address). The email will link to the assignments report

- b) Alternatively, click on the  icon


- c) Click on the name of the exercise and you will see the list of all students and their results.

Note: R/A/G shows performance and then a range of other results (first score, highest, latest, best etc).

- d) At the bottom of the same report is a list of the questions and how many students got them wrong.

In this example you will see that 12 students got the first question wrong.







- e) If you click on the 12 you will see the list filters to show you which students got it wrong AND tags them on the left hand side ready to send them a feedback message.

7rb4 - Negative Numbers	Thompson, James	24 / 25	1	10 th Dec 2015 12:00am	Thu, 21 st Jul 3:00pm	
-------------------------	-----------------	---------	---	-----------------------------------	----------------------------------	---

Task Exercise Report

Last Name	First Name	Feedback	Time	Time/Q	Attempts	First	Last	Avg	Best
Baker	Carry		00:08:55	0	1	80%	80%	80%	80%
Baker	Kimberly		00:20:23	0	2	10%	74%	42%	74%
Bennett	Andrew		00:22:33	0	2	35%	70%	53%	70%
Bennett	Taylor		00:09:18	0	1	77%	77%	77%	77%
Bliss	Ellie		00:22:50	0	2	0%	95%	48%	95%
Cooper	Shelby		00:13:00	0	2	24%	100%	62%	100%
Cooper	Thomas		00:28:04	0	1	74%	74%	74%	74%
Davies	Oliver		00:31:51	0	2	54%	82%	68%	82%
Evans	Joshua		00:14:32	0	1	95%	95%	95%	95%
Evans	Lara		00:22:42	0	1	91%	91%	91%	91%

Questions View

Type	Questions	Feedback	Wrong Attempts
Multiple Choice	Daniela sets herself a high jump target of 1 metre. She scores at each attempt in centimetres above or below her target. What does a jump of 95cm...		12
Free Text	A race car weighs 1.197kg. To make the car faster the mechanic manages to cut 99kg of unwanted parts. What is the new weight?		11
Free Text	A skip lorry weighs 23.050 kg. It tips its load of 6.970kg. What is its empty weight?		11
Free Text	James was 107cm tall when he was in year 1. By year 6 he was 153cm. How many cms had he grown?		11
Free Text	Doncaster Rovers got 6.750 spectators a game last season. After promotion the number went up 3.500 per game. What is the new attendance?		8
Multiple Choice	The temperature rises 19 degrees from -7 degrees Celsius. What is the temperature now?		6

Task Exercise Report

Last Name	First Name	Feedback	Time	Time/Q	Attempts	First	Last	Avg	Best
Baker	Carry		00:08:55	0	1	80%	80%	80%	80%
Baker	Kimberly		00:20:23	0	2	10%	74%	42%	74%
Bennett	Andrew		00:22:33	0	2	35%	70%	53%	70%
Bennett	Taylor		00:09:18	0	1	77%	77%	77%	77%
Bliss	Ellie		00:22:50	0	2	0%	95%	48%	95%
Cooper	Shelby		00:13:00	0	2	24%	100%	62%	100%
Cooper	Thomas		00:28:04	0	1	74%	74%	74%	74%
Davies	Oliver		00:31:51	0	2	54%	82%	68%	82%
Evans	Joshua		00:14:32	0	1	95%	95%	95%	95%
Evans	Lara		00:22:42	0	1	91%	91%	91%	91%

Sending feedback

Task Exercise Report

Negative number problems

Download CSV Give Question Feedback

	Last Name	First Name	Feedback	Time	Time/Q	Attempts	First	Last	Avg	Best
	Edwin	Sammy		00:08:55	0	1	80%	80%	80%	80%
	Edwin	Kimberly		00:20:23	0	2	10%	74%	42%	74%
✓	Bennett	Andrew		00:22:33	0	2	35%	70%	53%	70%
	Bennett	Taylor		00:09:18	0	1	77%	77%	77%	77%
	Edwin	Ellie		00:22:50	0	2	0%	95%	68%	95%
✓	Cooper	Shelby		00:13:00	0	2	24%	100%	62%	100%
	Cooper	Thomas		00:26:04	0	1	74%	74%	74%	74%
✓	Davies	Owen		00:31:51	0	2	54%	82%	68%	82%
	Edwin	Samuel		00:14:32	0	1	95%	95%	95%	95%
	Evans	Lara		00:22:42	0	1	91%	91%	91%	91%

f) Click on Give Question Feedback

Give Feedback

Provide feedback to 12 students for the question:

"Daniela sets herself a high jump target of 1 metre. She scores at each attempt in centimetres above or below her target. What does a jump of 96cm score?"

View Question

Enter your feedback here

Send

g) A pop up appears, specific to the question.

h) Type your message in here to help the students improve.

NOTE: It could be free text from the teacher or could be a link to a resource in Frog (URL link) to tell them what to do to improve.

Feedback is proven to help a student improve and this is the single most influential section of the system to aid student performance.

Matrix view

Questions View Matrix View

Best Results

Download Matrix CSV

Student	Q1	Q2	Q3	Q4	Q5	Q6	Q7	Q8	Q9	Q10	Q11	Q12	Q13	Q14	Q15	Q16	Q17	Q18	Q19	Q20
Lara Evans	✓	✓	✓	✓	✓	✓	✓	✓	✓	✓	✓	✓	✓	✓	✓	✓	✓	✓	✓	✓
Jacob Thomas	✓	✓	✓	✓	✓	✓	✓	✓	✓	✓	✓	✓	✓	✓	✓	✓	✓	✓	✓	✓
Jack Morgan	✓	✓	✓	✓	✓	✓	✓	✓	✓	✓	✓	✓	✓	✓	✓	✓	✓	✓	✓	✓
Stanley Patel	✓	✓	✓	✓	✓	✓	✓	✓	✓	✓	✓	✓	✓	✓	✓	✓	✓	✓	✓	✓
Maisie Thompson	✓	✓	✓	✓	✓	✓	✓	✓	✓	✓	✓	✓	✓	✓	✓	✓	✓	✓	✓	✓
Leyton Johnson	✓	✓	✓	✓	✓	✓	✓	✓	✓	✓	✓	✓	✓	✓	✓	✓	✓	✓	✓	✓
Sophie Taylor	✓	✓	✓	✓	✓	✓	✓	✓	✓	✓	✓	✓	✓	✓	✓	✓	✓	✓	✓	✓
Corey White	✓	✗	✓	✓	✓	✓	✓	✓	✓	✓	✓	✓	✓	✓	✓	✓	✓	✓	✓	✗
Almea Wood	✓	✓	✓	✓	✓	✓	✓	✓	✓	✓	✓	✓	✓	✓	✓	✓	✓	✓	✓	✓
Kimberly Baker	✓	✓	✓	✓	✓	✓	✓	✓	✓	✓	✓	✓	✓	✓	✓	✓	✓	✓	✓	✓
Ellie Brown	✗																			

Switching to the Matrix view shows the same data about which students answered what but in a different format which may make it easier to understand gaps in student knowledge.

Clicking on the question number will show you the question and correct answer.

Question Details

A skip lorry weighs 23,050 kg. It tips its load of 8,070kg. What is its empty weight?

_____kg

Name Answer

No Answers Given

Send Feedback

Clicking on any of the red ✗ will tell you what that student answered for that question.

There is an option to send student feedback directly from here.